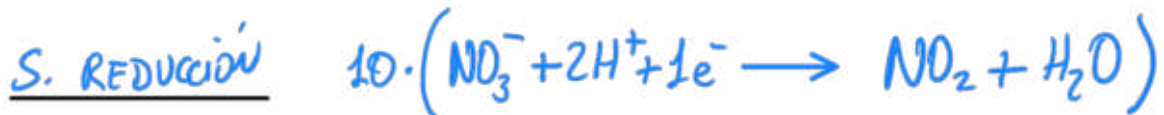
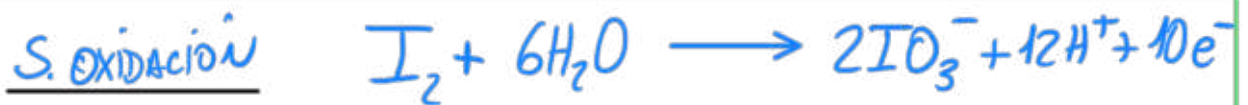
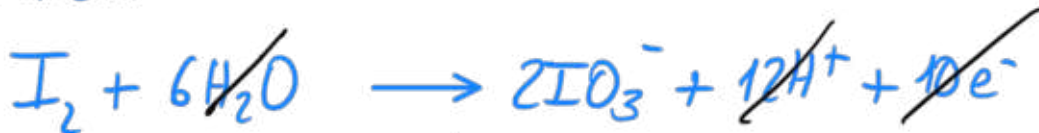


a) ESPECIE OXIDANTE ES HNO_3 // SE OXIDA I_2
 ESPECIE REDUCTORA I_2 // SE REDUCE HNO_3

b)



NOS QUEDA:



↳ IÓNICA

c)



↳ GLOBAL AJUSTADA.